

Last Name:

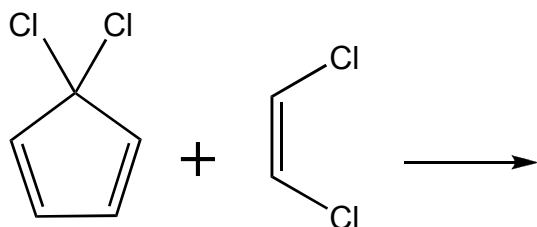
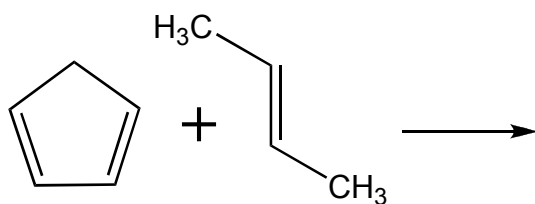
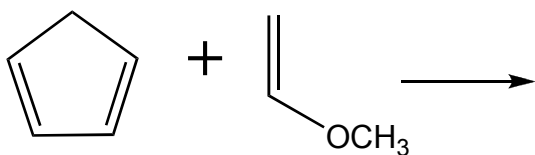
First Name:

UTEID:

SCORE:

Deadline for CH310N HW 8, Due: Nov 14 3:00 PM

Diels-Alder Reactions-Bicyclic Products: Draw the structures of the products between the following dienes and dienophiles. Be sure to clearly indicate both regio and stereochemistry.



Diels-Alder Reactions: Draw the structures of the dieneophiles to product the following products. Be sure to clearly indicate both regio and stereochemistry.

